



Tiered **I**nterventions Using
Evidence-Based **R**esearch

Computational Fluency Progress-Monitoring System for K–6 Mathematics

Grade K: Teacher




Note: These answer keys are used for both English and Spanish forms.

KEY



For each problem circle which is greater.

KEY

 Fill in the blank with the missing number. If you don't know how to work the problem, put an X over it and move to the next problem.

1, __, 3, 4 2	10, 11, 12, __ 13	7, 8, __, 10 9	16, 17, __, 19 18	6, 5, 4, __ 3
17, 16, __, 14 15	8, __, 6, 5 7	10, __, 12, 13 11	9, 8, __, 6 7	16, 15, 14, __ 13


KEY



For each problem circle which is greater.

		<div>4</div> <div>5</div>		<div>20</div> <div>2</div>
	<div>8</div> <div>4</div>	<div>13</div> <div>10</div>		<div>16</div> <div>20</div>
	<div>5</div> <div>8</div>		<div>11</div> <div>12</div>	
<div>15</div> <div>14</div>	<div>7</div> <div>19</div>	<div>7</div> <div>6</div>		

KEY

 Fill in the blank with the missing number. If you don't know how to work the problem, put an X over it and move to the next problem.


11, 12, 13, ____ 14	2, ____, 4, 5 3	17, 18, ____, 20 19	6, 7, ____, 9 8	7, 6, 5, ____ 4
16, 15, ____, 13 14	9, ____, 7, 6 8	15, ____, 17, 18 16	10, 9, ____, 7 8	17, 16, 15, ____ 14

KEY



For each problem circle which is greater.

KEY

 Fill in the blank with the missing number. If you don't know how to work the problem, put an X over it and move to the next problem.


3, ____, 5, 6 4	12, 13, 14, ____, 15	5, 6, ____, 8 7	10, 11, ____, 13 12	8, 7, 6, ____, 5
15, 14, ____, 12 13	10, ____, 8, 7 9	13, ____, 15, 16 14	4, 3, ____, 1 2	18, 17, 16, ____, 15

KEY



For each problem circle which is greater.

KEY

 Fill in the blank with the missing number. If you don't know how to work the problem, put an X over it and move to the next problem.

13, 14, 15, ____ 16	4, ____, 6, 7 5	11, 12, ____, 14 13	4, 5, ____, 7 6	9, 8, 7, ____ 6
13, 12, ____, 10 11	4, ____, 2, 1 3	12, ____, 14, 15 13	5, 4, ____, 2 3	19, 18, 17, ____ 16


KEY



For each problem circle which is greater.

		<div>8</div> <div>9</div>		<div>17</div> <div>3</div>
	<div>4</div> <div>1</div>	<div>20</div> <div>16</div>		<div>11</div> <div>15</div>
	<div>2</div> <div>8</div>		<div>14</div> <div>15</div>	
<div>18</div> <div>17</div>	<div>2</div> <div>16</div>	<div>6</div> <div>5</div>		

KEY

 Fill in the blank with the missing number. If you don't know how to work the problem, put an X over it and move to the next problem.


5, __, 7, 8 6	14, 15, 16, __ 17	3, 4, __, 6 5	12, 13, __, 15 14	10, 9, 8, __ 7
14, 13, __, 11 12	5, __, 3, 2 4	14, __, 16, 17 15	6, 5, __, 3 4	20, 19, 18, __ 17

KEY



For each problem circle which is greater.

KEY

 Fill in the blank with the missing number. If you don't know how to work the problem, put an X over it and move to the next problem.


15, 16, 17, ____ 18	6, ____, 8, 9 7	13, 14, ____, 16 15	2, 3, ____, 5 4	4, 3, 2, ____ 1
18, 17, ____, 15 16	6, ____, 4, 3 5	16, ____, 18, 19 17	7, 6, ____, 4 5	13, 12, 11, ____ 10

KEY



For each problem circle which is greater.

KEY

 Fill in the blank with the missing number. If you don't know how to work the problem, put an X over it and move to the next problem.

7, __, 9, 10 8	16, 17, 18, __ 19	1, 2, __, 4 3	14, 15, __, 17 16	5, 4, 3, __ 2
19, 18, __, 16 17	7, __, 5, 4 6	15, __, 17, 18 16	8, 7, __, 5 6	14, 13, 12, __ 11


KEY



For each problem circle which is greater.

		<div>5</div> <div>6</div>		<div>13</div> <div>4</div>
	<div>8</div> <div>5</div>	<div>15</div> <div>13</div>		<div>14</div> <div>19</div>
	<div>6</div> <div>8</div>		<div>17</div> <div>18</div>	
<div>16</div> <div>15</div>	<div>5</div> <div>14</div>	<div>3</div> <div>2</div>		

KEY

 Fill in the blank with the missing number. If you don't know how to work the problem, put an X over it and move to the next problem.


17, 18, 19, ____ 20	1, ____, 3, 4 2	15, 16, ____, 18 17	7, 8, ____, 10 9	6, 5, 4, ____ 3
20, 19, ____, 17 18	8, ____, 6, 5 7	16, ____, 18, 19 17	9, 8, ____, 6 7	15, 14, 13, ____ 12

KEY



For each problem circle which is greater.

KEY

 Fill in the blank with the missing number. If you don't know how to work the problem, put an X over it and move to the next problem.


2, ____, 4, 5 3	10, 11, 12, ____ 13	6, 7, ____, 9 8	16, 17, ____, 19 18	7, 6, 5, ____ 4
17, 16, ____, 14 15	9, ____, 7, 6 8	17, ____, 19, 20 18	10, 9, ____, 7 8	16, 15, 14, ____ 13

KEY



For each problem circle which is greater.

KEY

 Fill in the blank with the missing number. If you don't know how to work the problem, put an X over it and move to the next problem.

11, 12, 13, ____ 14	3, ____, 5, 6 4	17, 18, ____, 20 19	4, 5, ____, 7 6	8, 7, 6, ____ 5
13, 12, ____, 10 11	10, ____, 8, 7 9	11, ____, 13, 14 12	4, 3, ____, 1 2	20, 19, 18, ____ 17


KEY



For each problem circle which is greater.

		<div>2</div> <div>3</div>		<div>11</div> <div>9</div>
	<div>9</div> <div>6</div>	<div>18</div> <div>15</div>		<div>17</div> <div>19</div>
	<div>5</div> <div>7</div>		<div>13</div> <div>14</div>	
<div>10</div> <div>9</div>	<div>8</div> <div>13</div>	<div>7</div> <div>6</div>		

KEY

 Fill in the blank with the missing number. If you don't know how to work the problem, put an X over it and move to the next problem.


4, __, 6, 7 5	12, 13, 14, __ 15	5, 6, __, 8 7	10, 11, __, 13 12	9, 8, 7, __ 6
14, 13, __, 11 12	4, __, 2, 1 3	17, __, 19, 20 18	5, 4, __, 2 3	13, 12, 11, __ 10

KEY



For each problem circle which is greater.

KEY

 Fill in the blank with the missing number. If you don't know how to work the problem, put an X over it and move to the next problem.


13, 14, 15, ____ 16	5, ____, 7, 8 6	11, 12, ____, 14 13	3, 4, ____, 6 5	10, 9, 8, ____ 7
15, 14, ____, 12 13	5, ____, 3, 2 4	16, ____, 18, 19 17	6, 5, ____, 3 4	14, 13, 12, ____ 11

KEY



For each problem circle which is greater.

KEY

 Fill in the blank with the missing number. If you don't know how to work the problem, put an X over it and move to the next problem.


6, ____, 8, 9 7	14, 15, 16, ____ 17	2, 3, ____, 5 4	12, 13, ____, 15 14	4, 3, 2, ____ 1
16, 15, ____, 13 14	6, ____, 4, 3 5	15, ____, 17, 18 16	7, 6, ____, 4 5	15, 14, 13, ____ 12

KEY



For each problem circle which is greater.

KEY

 Fill in the blank with the missing number. If you don't know how to work the problem, put an X over it and move to the next problem.

15, 16, 17, ____ 18	7, ____, 9, 10 8	13, 14, ____, 16 15	1, 2, ____, 4 3	5, 4, 3, ____ 2
17, 16, ____, 14 15	7, ____, 5, 4 6	13, ____, 15, 16 14	8, 7, ____, 5 6	14, 13, 12, ____ 11


KEY



For each problem circle which is greater.

		<div>8</div> <div>9</div>		<div>16</div> <div>8</div>
	<div>6</div> <div>1</div>	<div>17</div> <div>13</div>		<div>12</div> <div>19</div>
	<div>4</div> <div>7</div>		<div>14</div> <div>15</div>	
<div>20</div> <div>19</div>	<div>5</div> <div>18</div>	<div>5</div> <div>4</div>		

KEY

 Fill in the blank with the missing number. If you don't know how to work the problem, put an X over it and move to the next problem.


1, __, 3, 4 2	16, 17, 18, __ 19	6, 7, __, 9 8	14, 15, __, 17 16	6, 5, 4, __ 3
18, 17, __, 15 16	8, __, 6, 5 7	14, __, 16, 17 15	9, 8, __, 6 7	15, 14, 13, __ 12

KEY



For each problem circle which is greater.

KEY

 Fill in the blank with the missing number. If you don't know how to work the problem, put an X over it and move to the next problem.


17, 18, 19, ____ 20	2, ____, 4, 5 3	15, 16, ____, 18 17	5, 6, ____, 8 7	7, 6, 5, ____ 4
19, 18, ____, 16 17	9, ____, 7, 6 8	12, ____, 14, 15 13	10, 9, ____, 7 8	16, 15, 14, ____ 13

KEY



For each problem circle which is greater.

KEY

 Fill in the blank with the missing number. If you don't know how to work the problem, put an X over it and move to the next problem.


3, __, 5, 6 4	16, 17, 18, __ 19	4, 5, __, 7 6	16, 17, __, 19 18	8, 7, 6, __ 5
20, 19, __, 17 18	10, __, 8, 7 9	11, __, 13, 14 12	4, 3, __, 1 2	17, 16, 15, __ 14

KEY



For each problem circle which is greater.

KEY

 Fill in the blank with the missing number. If you don't know how to work the problem, put an X over it and move to the next problem.


11, 12, 13, ____ 14	4, ____, 6, 7 5	17, 18, ____, 20 19	3, 4, ____, 6 5	9, 8, 7, ____ 6
20, 19, ____, 17 18	4, ____, 2, 1 3	10, ____, 12, 13 11	5, 4, ____, 2 3	18, 17, 16, ____ 15

KEY



For each problem circle which is greater.

KEY

 Fill in the blank with the missing number. If you don't know how to work the problem, put an X over it and move to the next problem.


5, __, 7, 8 6	12, 13, 14, __ 15	2, 3, __, 5 4	10, 11, __, 13 12	10, 9, 8, __ 7
19, 18, __, 16 17	5, __, 3, 2 4	17, __, 19, 20 18	6, 5, __, 3 4	19, 18, 17, __ 16

KEY



For each problem circle which is greater.

KEY

 Fill in the blank with the missing number. If you don't know how to work the problem, put an X over it and move to the next problem.

13, 14, 15, ____ 16	6, ____, 8, 9 7	11, 12, ____, 14 13	1, 2, ____, 4 3	4, 3, 2, ____ 1
18, 17, ____, 15 16	6, ____, 4, 3 5	10, ____, 12, 13 11	7, 6, ____, 4 5	20, 19, 18, ____ 17